


# Counting Candy Hearts (9)

Name: \_\_\_\_\_

Date: \_\_\_\_\_

Count how many candy hearts there are in each group.

1. There are \_\_\_\_\_ green hearts in the group below.




2. There are \_\_\_\_\_ orange hearts in the group below.



3. There are \_\_\_\_\_ pink hearts in the group below.



4. There are \_\_\_\_\_ blue hearts in the group below.




# Counting Candy Hearts (9) Answers

Name: \_\_\_\_\_

Date: \_\_\_\_\_

Count how many candy hearts there are in each group.

1. There are 33 green hearts in the group below.



2. There are 22 orange hearts in the group below.



3. There are 30 pink hearts in the group below.



4. There are 32 blue hearts in the group below.

