


# Counting Candy Hearts (A)

Name: \_\_\_\_\_


Date: \_\_\_\_\_

Count how many candy hearts there are in each group.

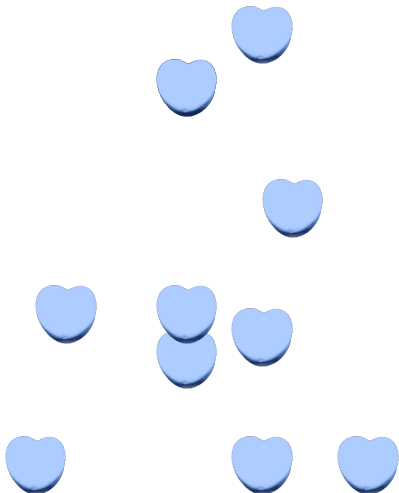
1. There are \_\_\_\_\_ pink hearts in the group below.



2. There are \_\_\_\_\_ green hearts in the group below.



3. There are \_\_\_\_\_ blue hearts in the group below.



4. There are \_\_\_\_\_ orange hearts in the group below.




# Counting Candy Hearts (A) Answers

Name: \_\_\_\_\_


Date: \_\_\_\_\_

Count how many candy hearts there are in each group.

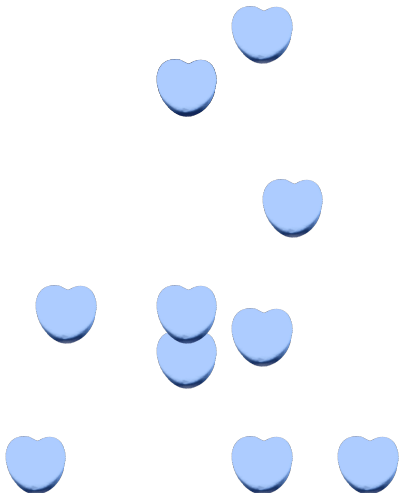
1. There are 14 pink hearts in the group below.



2. There are 12 green hearts in the group below.



3. There are 11 blue hearts in the group below.



4. There are 11 orange hearts in the group below.

