


# Counting Candy Hearts (D)

Name: \_\_\_\_\_


Date: \_\_\_\_\_

Count how many candy hearts there are in each group.


1. There are \_\_\_\_\_ green hearts in the group below.



2. There are \_\_\_\_\_ pink hearts in the group below.



3. There are \_\_\_\_\_ orange hearts in the group below.



4. There are \_\_\_\_\_ blue hearts in the group below.

