

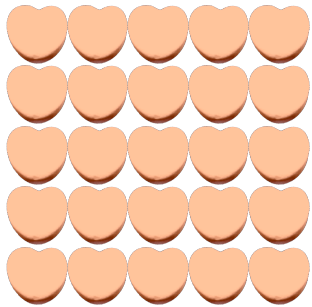
Counting Candy Hearts (A)

Name: _____

Date: _____

Count how many candy hearts there are in each group.


1. There are _____ orange hearts in the group below.




2. There are _____ green hearts in the group below.



3. There are _____ pink hearts in the group below.



4. There are _____ blue hearts in the group below.



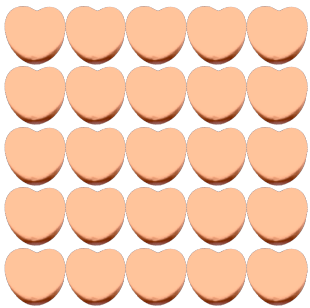
Counting Candy Hearts (A) Answers

Name: _____

Date: _____

Count how many candy hearts there are in each group.


1. There are 25 orange hearts in the group below.




2. There are 14 green hearts in the group below.



3. There are 48 pink hearts in the group below.



4. There are 18 blue hearts in the group below.




Counting Candy Hearts (B)

Name: _____


Date: _____

Count how many candy hearts there are in each group.


1. There are _____ blue hearts in the group below.




2. There are _____ green hearts in the group below.



3. There are _____ pink hearts in the group below.



4. There are _____ orange hearts in the group below.




Counting Candy Hearts (B) Answers

Name: _____


Date: _____

Count how many candy hearts there are in each group.


1. There are 72 blue hearts in the group below.




2. There are 35 green hearts in the group below.



3. There are 18 pink hearts in the group below.



4. There are 35 orange hearts in the group below.




Counting Candy Hearts (C)

Name: _____


Date: _____

Count how many candy hearts there are in each group.


1. There are _____ pink hearts in the group below.




2. There are _____ orange hearts in the group below.



3. There are _____ green hearts in the group below.



4. There are _____ blue hearts in the group below.




Counting Candy Hearts (C) Answers

Name: _____


Date: _____

Count how many candy hearts there are in each group.


1. There are 30 pink hearts in the group below.




2. There are 49 orange hearts in the group below.



3. There are 24 green hearts in the group below.



4. There are 72 blue hearts in the group below.




Counting Candy Hearts (D)

Name: _____


Date: _____

Count how many candy hearts there are in each group.


1. There are _____ pink hearts in the group below.



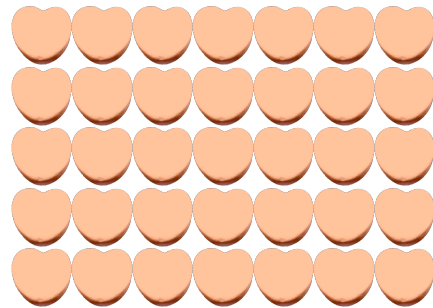
2. There are _____ blue hearts in the group below.



3. There are _____ green hearts in the group below.



4. There are _____ orange hearts in the group below.




Counting Candy Hearts (D) Answers

Name: _____


Date: _____

Count how many candy hearts there are in each group.


1. There are 36 pink hearts in the group below.



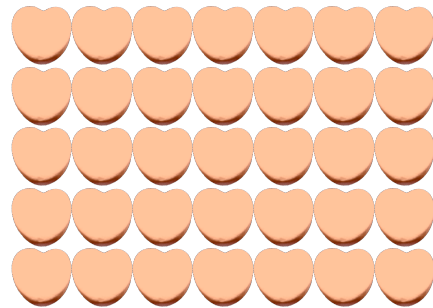
2. There are 48 blue hearts in the group below.



3. There are 21 green hearts in the group below.



4. There are 35 orange hearts in the group below.




Counting Candy Hearts (E)

Name: _____


Date: _____

Count how many candy hearts there are in each group.


1. There are _____ blue hearts in the group below.




2. There are _____ green hearts in the group below.



3. There are _____ orange hearts in the group below.



4. There are _____ pink hearts in the group below.




Counting Candy Hearts (E) Answers

Name: _____


Date: _____

Count how many candy hearts there are in each group.


1. There are 24 blue hearts in the group below.




2. There are 24 green hearts in the group below.



3. There are 63 orange hearts in the group below.



4. There are 56 pink hearts in the group below.




Counting Candy Hearts (F)

Name: _____


Date: _____

Count how many candy hearts there are in each group.


1. There are _____ blue hearts in the group below.




2. There are _____ orange hearts in the group below.



3. There are _____ green hearts in the group below.



4. There are _____ pink hearts in the group below.




Counting Candy Hearts (F) Answers

Name: _____


Date: _____

Count how many candy hearts there are in each group.


1. There are 8 blue hearts in the group below.




2. There are 49 orange hearts in the group below.



3. There are 45 green hearts in the group below.



4. There are 45 pink hearts in the group below.




Counting Candy Hearts (G)

Name: _____

Date: _____

Count how many candy hearts there are in each group.


1. There are _____ blue hearts in the group below.




2. There are _____ pink hearts in the group below.



3. There are _____ green hearts in the group below.



4. There are _____ orange hearts in the group below.




Counting Candy Hearts (G) Answers

Name: _____

Date: _____

Count how many candy hearts there are in each group.


1. There are 56 blue hearts in the group below.




2. There are 15 pink hearts in the group below.



3. There are 36 green hearts in the group below.



4. There are 56 orange hearts in the group below.



Counting Candy Hearts (7)

Name: _____

Date: _____

Count how many candy hearts there are in each group.

1. There are _____ orange hearts in the group below.




2. There are _____ pink hearts in the group below.



3. There are _____ blue hearts in the group below.



4. There are _____ green hearts in the group below.



Counting Candy Hearts (7) Answers

Name: _____


Date: _____

Count how many candy hearts there are in each group.


1. There are 8 orange hearts in the group below.




2. There are 27 pink hearts in the group below.



3. There are 12 blue hearts in the group below.



4. There are 21 green hearts in the group below.



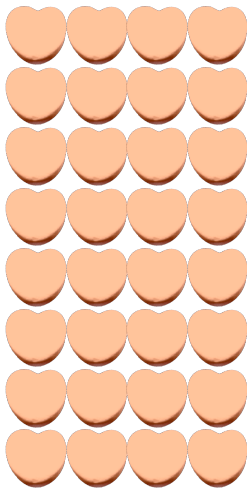
Counting Candy Hearts (9)

Name: _____


Date: _____

Count how many candy hearts there are in each group.


1. There are _____ orange hearts in the group below.



2. There are _____ green hearts in the group below.



3. There are _____ blue hearts in the group below.



4. There are _____ pink hearts in the group below.



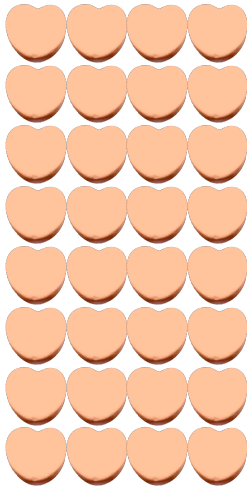
Counting Candy Hearts (9) Answers

Name: _____


Date: _____

Count how many candy hearts there are in each group.


1. There are 32 orange hearts in the group below.



2. There are 63 green hearts in the group below.



3. There are 18 blue hearts in the group below.



4. There are 10 pink hearts in the group below.




Counting Candy Hearts (9)

Name: _____


Date: _____

Count how many candy hearts there are in each group.


1. There are _____ blue hearts in the group below.




2. There are _____ orange hearts in the group below.



3. There are _____ green hearts in the group below.



4. There are _____ pink hearts in the group below.




Counting Candy Hearts (9) Answers

Name: _____


Date: _____

Count how many candy hearts there are in each group.


1. There are 15 blue hearts in the group below.



2. There are 42 orange hearts in the group below.



3. There are 42 green hearts in the group below.



4. There are 36 pink hearts in the group below.

