

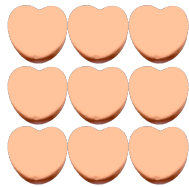
Counting Candy Hearts (D)

Name: _____

Date: _____

Count how many candy hearts there are in each group.


1. There are _____ orange hearts in the group below.



2. There are _____ blue hearts in the group below.



3. There are _____ pink hearts in the group below.



4. There are _____ green hearts in the group below.



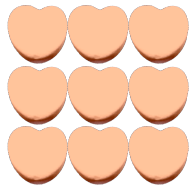
Counting Candy Hearts (D) Answers

Name: _____

Date: _____

Count how many candy hearts there are in each group.


1. There are 9 orange hearts in the group below.



2. There are 10 blue hearts in the group below.



3. There are 16 pink hearts in the group below.



4. There are 10 green hearts in the group below.

