

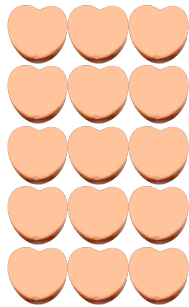
# Counting Candy Hearts (A)

Name: \_\_\_\_\_

Date: \_\_\_\_\_

Count how many candy hearts there are in each group.

1. There are \_\_\_\_\_ orange hearts in the group below.



2. There are \_\_\_\_\_ green hearts in the group below.



3. There are \_\_\_\_\_ pink hearts in the group below.



4. There are \_\_\_\_\_ blue hearts in the group below.



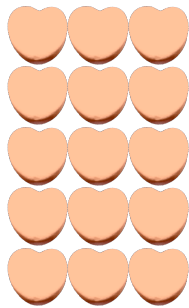
# Counting Candy Hearts (A) Answers

Name: \_\_\_\_\_


Date: \_\_\_\_\_

Count how many candy hearts there are in each group.

1. There are 15 orange hearts in the group below.



2. There are 15 green hearts in the group below.



3. There are 8 pink hearts in the group below.



4. There are 8 blue hearts in the group below.

