

Counting Candy Hearts (A)

Name: _____


Date: _____

Count how many candy hearts there are in each group.


1. There are _____ orange hearts in the group below.




2. There are _____ pink hearts in the group below.



3. There are _____ green hearts in the group below.



4. There are _____ blue hearts in the group below.



Counting Candy Hearts (A) Answers

Name: _____


Date: _____

Count how many candy hearts there are in each group.


1. There are 24 orange hearts in the group below.




2. There are 13 pink hearts in the group below.



3. There are 9 green hearts in the group below.



4. There are 81 blue hearts in the group below.




Counting Candy Hearts (B)

Name: _____


Date: _____

Count how many candy hearts there are in each group.

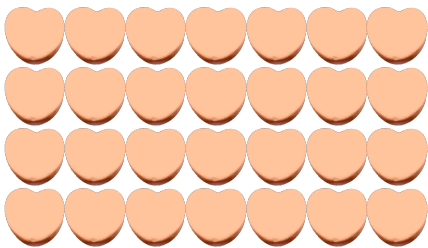
1. There are _____ blue hearts in the group below.



2. There are _____ green hearts in the group below.



3. There are _____ orange hearts in the group below.



4. There are _____ pink hearts in the group below.




Counting Candy Hearts (B) Answers

Name: _____


Date: _____

Count how many candy hearts there are in each group.

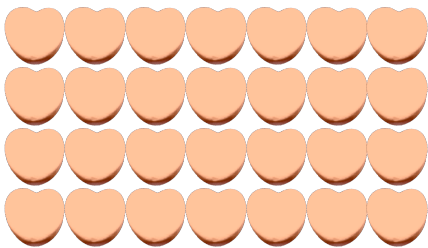
1. There are 34 blue hearts in the group below.



2. There are 7 green hearts in the group below.



3. There are 28 orange hearts in the group below.



4. There are 3 pink hearts in the group below.



Counting Candy Hearts (C)

Name: _____


Date: _____

Count how many candy hearts there are in each group.


1. There are _____ green hearts in the group below.




2. There are _____ pink hearts in the group below.



3. There are _____ blue hearts in the group below.



4. There are _____ orange hearts in the group below.




Counting Candy Hearts (C) Answers

Name: _____


Date: _____

Count how many candy hearts there are in each group.


1. There are 6 green hearts in the group below.




2. There are 30 pink hearts in the group below.



3. There are 18 blue hearts in the group below.



4. There are 9 orange hearts in the group below.




Counting Candy Hearts (D)

Name: _____


Date: _____

Count how many candy hearts there are in each group.


1. There are _____ pink hearts in the group below.




2. There are _____ blue hearts in the group below.



3. There are _____ orange hearts in the group below.



4. There are _____ green hearts in the group below.




Counting Candy Hearts (D) Answers

Name: _____


Date: _____

Count how many candy hearts there are in each group.


1. There are 18 pink hearts in the group below.




2. There are 8 blue hearts in the group below.



3. There are 11 orange hearts in the group below.



4. There are 37 green hearts in the group below.




Counting Candy Hearts (E)

Name: _____

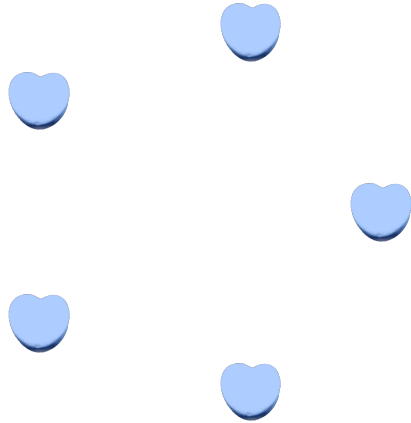
Date: _____

Count how many candy hearts there are in each group.

1. There are _____ pink hearts in the group below.



2. There are _____ blue hearts in the group below.



3. There are _____ green hearts in the group below.



4. There are _____ orange hearts in the group below.




Counting Candy Hearts (E) Answers

Name: _____

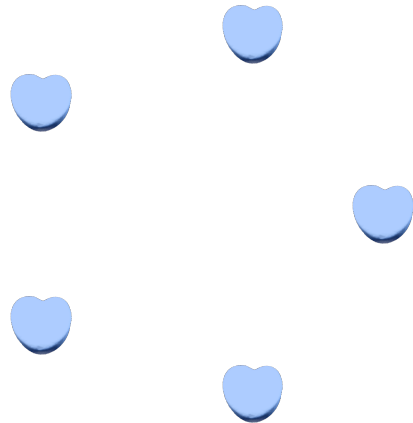
Date: _____

Count how many candy hearts there are in each group.

1. There are 20 pink hearts in the group below.



2. There are 5 blue hearts in the group below.



3. There are 4 green hearts in the group below.



4. There are 37 orange hearts in the group below.



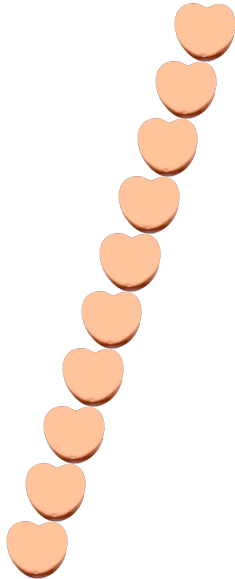
Counting Candy Hearts (F)

Name: _____


Date: _____

Count how many candy hearts there are in each group.


1. There are _____ orange hearts in the group below.




2. There are _____ pink hearts in the group below.



3. There are _____ blue hearts in the group below.



4. There are _____ green hearts in the group below.



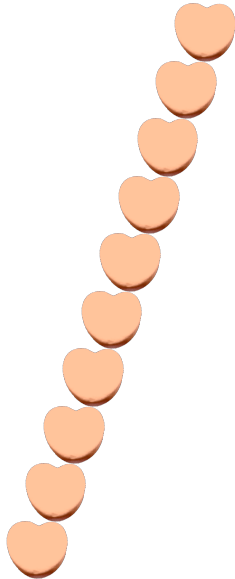
Counting Candy Hearts (F) Answers

Name: _____


Date: _____

Count how many candy hearts there are in each group.


1. There are 10 orange hearts in the group below.




2. There are 9 pink hearts in the group below.



3. There are 25 blue hearts in the group below.



4. There are 63 green hearts in the group below.



Counting Candy Hearts (G)

Name: _____


Date: _____

Count how many candy hearts there are in each group.


1. There are _____ orange hearts in the group below.




2. There are _____ green hearts in the group below.



3. There are _____ blue hearts in the group below.



4. There are _____ pink hearts in the group below.



Counting Candy Hearts (G) Answers

Name: _____


Date: _____

Count how many candy hearts there are in each group.


1. There are 38 orange hearts in the group below.




2. There are 48 green hearts in the group below.



3. There are 5 blue hearts in the group below.



4. There are 12 pink hearts in the group below.




Counting Candy Hearts (7)

Name: _____


Date: _____

Count how many candy hearts there are in each group.

1. There are _____ blue hearts in the group below.



2. There are _____ orange hearts in the group below.



3. There are _____ pink hearts in the group below.



4. There are _____ green hearts in the group below.




Counting Candy Hearts (7) Answers

Name: _____


Date: _____

Count how many candy hearts there are in each group.

1. There are 9 blue hearts in the group below.



2. There are 63 orange hearts in the group below.



3. There are 39 pink hearts in the group below.



4. There are 4 green hearts in the group below.



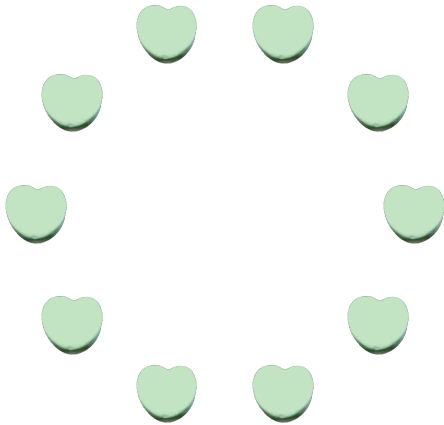
Counting Candy Hearts (9)

Name: _____

Date: _____

Count how many candy hearts there are in each group.


1. There are _____ green hearts in the group below.



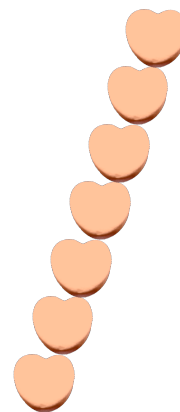
2. There are _____ pink hearts in the group below.



3. There are _____ blue hearts in the group below.



4. There are _____ orange hearts in the group below.



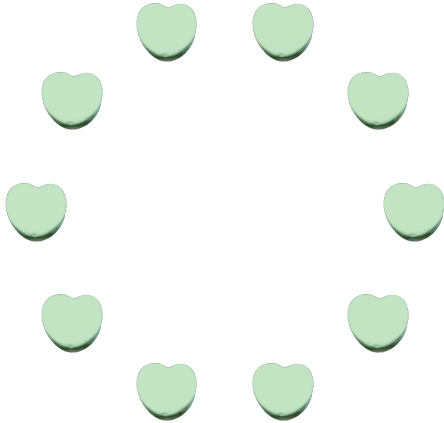
Counting Candy Hearts (9) Answers

Name: _____

Date: _____

Count how many candy hearts there are in each group.


1. There are 10 green hearts in the group below.



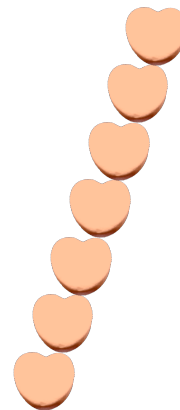
2. There are 39 pink hearts in the group below.



3. There are 18 blue hearts in the group below.



4. There are 7 orange hearts in the group below.




Counting Candy Hearts (9)

Name: _____


Date: _____

Count how many candy hearts there are in each group.

1. There are _____ pink hearts in the group below.



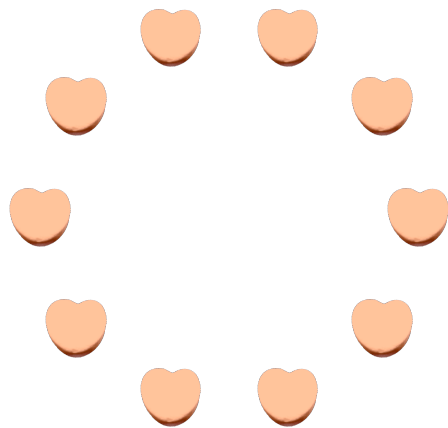
2. There are _____ blue hearts in the group below.



3. There are _____ green hearts in the group below.



4. There are _____ orange hearts in the group below.




Counting Candy Hearts (9) Answers

Name: _____


Date: _____

Count how many candy hearts there are in each group.

1. There are 21 pink hearts in the group below.



2. There are 28 blue hearts in the group below.



3. There are 8 green hearts in the group below.



4. There are 10 orange hearts in the group below.

