


# Counting Candy Hearts (9)

Name: \_\_\_\_\_


Date: \_\_\_\_\_

Count how many candy hearts there are in each group.

1. There are \_\_\_\_\_ pink hearts in the group below.



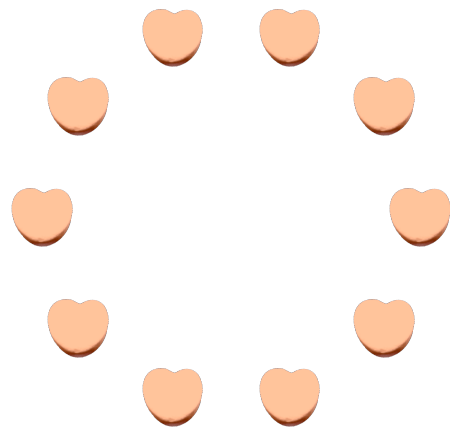
2. There are \_\_\_\_\_ blue hearts in the group below.



3. There are \_\_\_\_\_ green hearts in the group below.



4. There are \_\_\_\_\_ orange hearts in the group below.




# Counting Candy Hearts (9) Answers

Name: \_\_\_\_\_


Date: \_\_\_\_\_

Count how many candy hearts there are in each group.

1. There are 21 pink hearts in the group below.



2. There are 28 blue hearts in the group below.



3. There are 8 green hearts in the group below.



4. There are 10 orange hearts in the group below.

