


# Counting Candy Hearts (E)

Name: \_\_\_\_\_

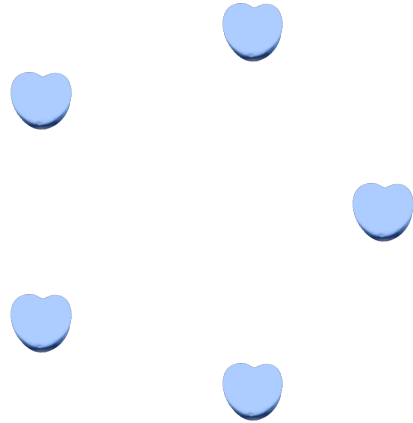
Date: \_\_\_\_\_

Count how many candy hearts there are in each group.

1. There are \_\_\_\_\_ pink hearts in the group below.



2. There are \_\_\_\_\_ blue hearts in the group below.



3. There are \_\_\_\_\_ green hearts in the group below.



4. There are \_\_\_\_\_ orange hearts in the group below.




# Counting Candy Hearts (E) Answers

Name: \_\_\_\_\_

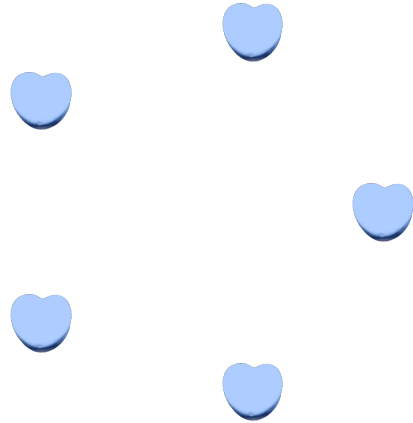
Date: \_\_\_\_\_

Count how many candy hearts there are in each group.


1. There are 20 pink hearts in the group below.



2. There are 5 blue hearts in the group below.



3. There are 4 green hearts in the group below.



4. There are 37 orange hearts in the group below.

