


# Counting Candy Hearts (B)

Name: \_\_\_\_\_


Date: \_\_\_\_\_

Count how many candy hearts there are in each group.

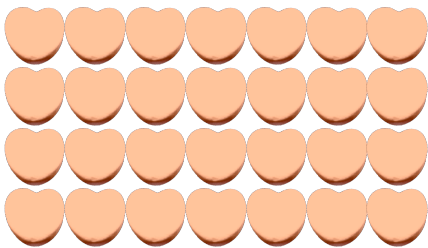
1. There are \_\_\_\_\_ blue hearts in the group below.



2. There are \_\_\_\_\_ green hearts in the group below.



3. There are \_\_\_\_\_ orange hearts in the group below.



4. There are \_\_\_\_\_ pink hearts in the group below.




# Counting Candy Hearts (B) Answers

Name: \_\_\_\_\_


Date: \_\_\_\_\_

Count how many candy hearts there are in each group.

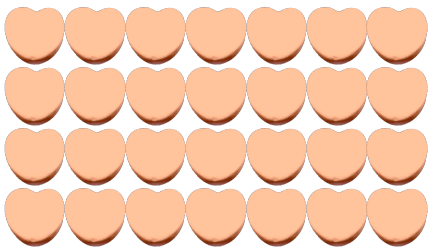
1. There are 34 blue hearts in the group below.



2. There are 7 green hearts in the group below.



3. There are 28 orange hearts in the group below.



4. There are 3 pink hearts in the group below.

