

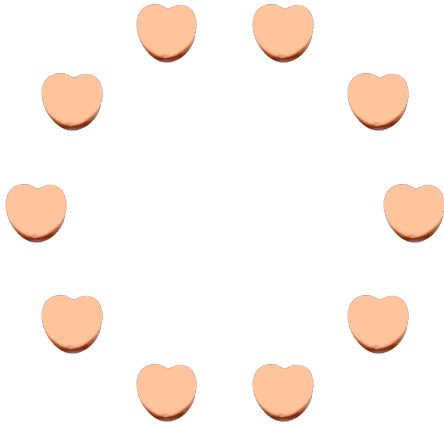
Counting Candy Hearts (A)

Name: _____


Date: _____

Count how many candy hearts there are in each group.

1. There are _____ orange hearts in the group below.




2. There are _____ blue hearts in the group below.



3. There are _____ pink hearts in the group below.



4. There are _____ green hearts in the group below.




Counting Candy Hearts (A) Answers

Name: _____


Date: _____

Count how many candy hearts there are in each group.

1. There are 10 orange hearts in the group below.




2. There are 7 blue hearts in the group below.



3. There are 6 pink hearts in the group below.



4. There are 15 green hearts in the group below.



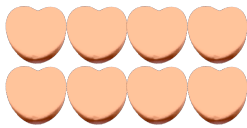
Counting Candy Hearts (B)

Name: _____


Date: _____

Count how many candy hearts there are in each group.

1. There are _____ orange hearts in the group below.




2. There are _____ green hearts in the group below.



3. There are _____ blue hearts in the group below.



4. There are _____ pink hearts in the group below.



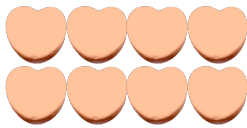
Counting Candy Hearts (B) Answers

Name: _____


Date: _____

Count how many candy hearts there are in each group.

1. There are 8 orange hearts in the group below.




2. There are 11 green hearts in the group below.



3. There are 7 blue hearts in the group below.



4. There are 6 pink hearts in the group below.



Counting Candy Hearts (C)

Name: _____


Date: _____

Count how many candy hearts there are in each group.


1. There are _____ blue hearts in the group below.



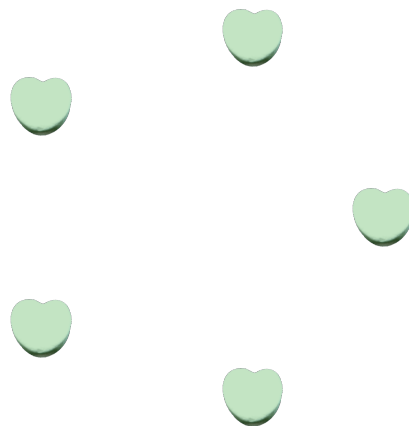
2. There are _____ pink hearts in the group below.



3. There are _____ orange hearts in the group below.



4. There are _____ green hearts in the group below.



Counting Candy Hearts (C) Answers

Name: _____


Date: _____

Count how many candy hearts there are in each group.


1. There are 3 blue hearts in the group below.



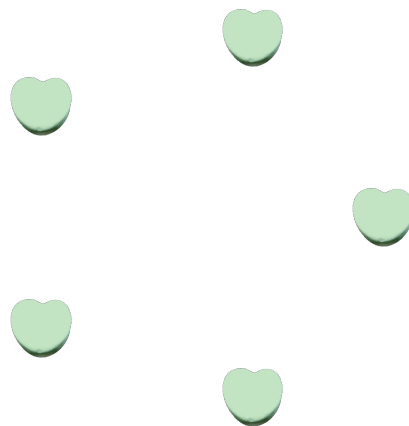
2. There are 12 pink hearts in the group below.



3. There are 9 orange hearts in the group below.



4. There are 5 green hearts in the group below.




Counting Candy Hearts (D)

Name: _____

Date: _____

Count how many candy hearts there are in each group.


1. There are _____ orange hearts in the group below.




2. There are _____ blue hearts in the group below.



3. There are _____ green hearts in the group below.



4. There are _____ pink hearts in the group below.




Counting Candy Hearts (D) Answers

Name: _____

Date: _____

Count how many candy hearts there are in each group.


1. There are 7 orange hearts in the group below.




2. There are 4 blue hearts in the group below.



3. There are 12 green hearts in the group below.



4. There are 14 pink hearts in the group below.



Counting Candy Hearts (E)

Name: _____


Date: _____

Count how many candy hearts there are in each group.


1. There are _____ blue hearts in the group below.



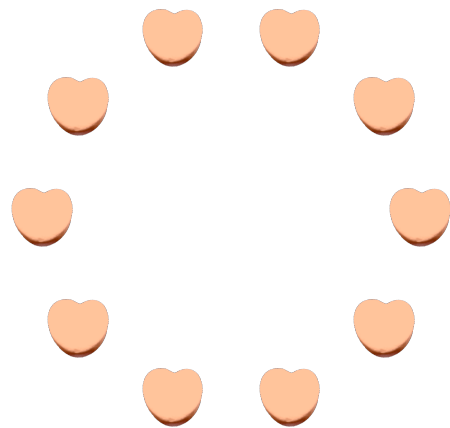
2. There are _____ pink hearts in the group below.



3. There are _____ green hearts in the group below.



4. There are _____ orange hearts in the group below.



Counting Candy Hearts (E) Answers

Name: _____


Date: _____

Count how many candy hearts there are in each group.


1. There are 9 blue hearts in the group below.



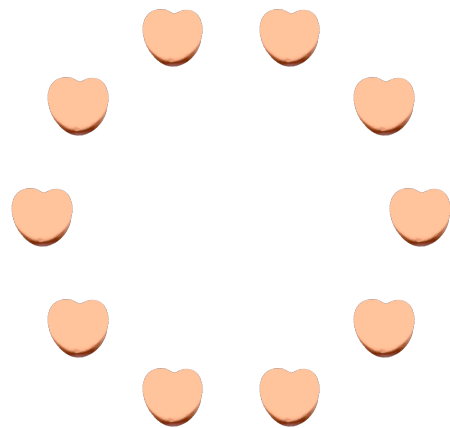
2. There are 7 pink hearts in the group below.



3. There are 20 green hearts in the group below.



4. There are 10 orange hearts in the group below.




Counting Candy Hearts (F)

Name: _____


Date: _____

Count how many candy hearts there are in each group.

1. There are _____ pink hearts in the group below.



2. There are _____ green hearts in the group below.



3. There are _____ blue hearts in the group below.



4. There are _____ orange hearts in the group below.




Counting Candy Hearts (F) Answers

Name: _____


Date: _____

Count how many candy hearts there are in each group.

1. There are 15 pink hearts in the group below.



2. There are 14 green hearts in the group below.



3. There are 6 blue hearts in the group below.



4. There are 5 orange hearts in the group below.



Counting Candy Hearts (G)

Name: _____


Date: _____

Count how many candy hearts there are in each group.


1. There are _____ green hearts in the group below.



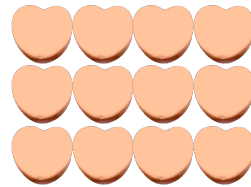
2. There are _____ pink hearts in the group below.



3. There are _____ blue hearts in the group below.



4. There are _____ orange hearts in the group below.



Counting Candy Hearts (G) Answers

Name: _____


Date: _____

Count how many candy hearts there are in each group.


1. There are 3 green hearts in the group below.



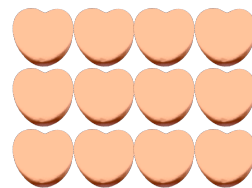
2. There are 11 pink hearts in the group below.



3. There are 9 blue hearts in the group below.



4. There are 12 orange hearts in the group below.




Counting Candy Hearts (7)

Name: _____

Date: _____

Count how many candy hearts there are in each group.


1. There are _____ orange hearts in the group below.




2. There are _____ blue hearts in the group below.



3. There are _____ green hearts in the group below.



4. There are _____ pink hearts in the group below.




Counting Candy Hearts (7) Answers

Name: _____

Date: _____

Count how many candy hearts there are in each group.

1. There are 10 orange hearts in the group below.




2. There are 4 blue hearts in the group below.



3. There are 9 green hearts in the group below.



4. There are 10 pink hearts in the group below.




Counting Candy Hearts (9)

Name: _____


Date: _____

Count how many candy hearts there are in each group.


1. There are _____ green hearts in the group below.



2. There are _____ orange hearts in the group below.



3. There are _____ blue hearts in the group below.



4. There are _____ pink hearts in the group below.




Counting Candy Hearts (9) Answers

Name: _____


Date: _____

Count how many candy hearts there are in each group.


1. There are 11 green hearts in the group below.



2. There are 7 orange hearts in the group below.



3. There are 9 blue hearts in the group below.



4. There are 9 pink hearts in the group below.



Counting Candy Hearts (9)

Name: _____


Date: _____

Count how many candy hearts there are in each group.

1. There are _____ green hearts in the group below.




2. There are _____ blue hearts in the group below.



3. There are _____ orange hearts in the group below.



4. There are _____ pink hearts in the group below.



Counting Candy Hearts (9) Answers

Name: _____


Date: _____

Count how many candy hearts there are in each group.

1. There are 8 green hearts in the group below.



2. There are 14 blue hearts in the group below.



3. There are 5 orange hearts in the group below.



4. There are 6 pink hearts in the group below.

