



Sketching Time on Analog Clocks (E)


Name: _____


Date: _____


Sketch each time on the clock face above it.


1. 
Midnight 11:12:15 AM Noon


2. 
Noon 10:23:45 PM Midnight

3. 
Midnight 1:41:00 AM Noon

4. 
Midnight 7:00:00 AM Noon


5. 
Noon 6:42:45 PM Midnight

6. 
Midnight 4:41:30 AM Noon

7. 
Noon 3:53:15 PM Midnight

8. 
Midnight 9:56:45 AM Noon

9. 
Midnight 2:43:15 AM Noon

10. 
Noon 5:23:30 PM Midnight

11. 
Noon 12:11:30 PM Midnight

12. 
Noon 8:00:00 PM Midnight

Sketching Time on Analog Clocks (E) Answers

Name: _____

Date: _____

Sketch each time on the clock face above it.

