







Sketching Time on Analog Clocks (C)




Name: _____




Date: _____

Sketch each time on the clock face above it.



1. 
Noon  4:32:15 PM  Midnight




2. 
Midnight  6:20:15 AM  Noon



3. 
Noon  8:47:45 PM  Midnight


4. 
Noon  1:59:45 PM  Midnight



5. 
Noon  2:16:30 PM  Midnight

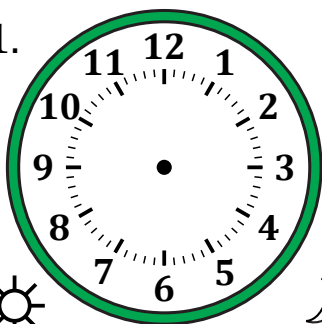


6. 
Midnight  1:49:30 AM  Noon



7. 
Midnight  5:22:45 AM  Noon

8. 
Noon  6:45:00 PM  Midnight

9. 
Midnight  10:53:00 AM  Noon

10. 
Midnight  2:55:15 AM  Noon

11. 
Noon  11:36:30 PM  Midnight

12. 
Midnight  8:17:00 AM  Noon

Sketching Time on Analog Clocks (C) Answers

Name: _____

Date: _____

Sketch each time on the clock face above it.

