



Sketching Time on Analog Clocks (I)


Name: _____


Date: _____

Sketch each time on the clock face above it.


1. 
Midnight 4:03:50 AM Noon


2. 
Noon 6:22:10 PM Midnight

3. 
Noon 11:19:20 PM Midnight


4. 
Midnight 1:59:45 AM Noon

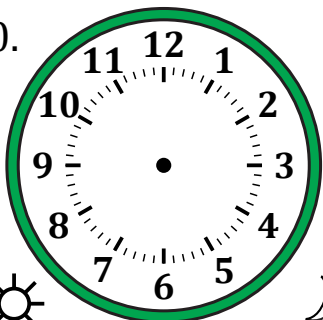
5. 
Midnight 3:13:30 AM Noon


6. 
Midnight 7:36:15 AM Noon

7. 
Noon 4:55:00 PM Midnight

8. 
Noon 12:35:55 PM Midnight

9. 
Midnight 11:05:25 AM Noon

10. 
Noon 9:16:35 PM Midnight

11. 
Midnight 9:45:40 AM Noon

12. 
Noon 3:09:05 PM Midnight


Sketching Time on Analog Clocks (I) Answers

Name: _____

Date: _____

Sketch each time on the clock face above it.

1.



2.



3.




4.



5.



6.



7.



8.



9.



10.



11.



12.

