


# Sketching Time on Analog Clocks (I)


Name: \_\_\_\_\_


Date: \_\_\_\_\_


Sketch each time on the clock face above it.


1.   
Noon 1:00 PM Midnight


2.   
Noon 7:30 PM Midnight


3.   
Midnight 3:30 AM Noon

4.   
Noon 5:00 PM Midnight


5.   
Midnight 10:30 AM Noon

6.   
Midnight 8:00 AM Noon


7.   
Noon 10:00 PM Midnight

8.   
Midnight 7:30 AM Noon

9.   
Noon 3:30 PM Midnight

10.   
Midnight 1:00 AM Noon

11.   
Noon 9:30 PM Midnight

12.   
Midnight 4:00 AM Noon

# Sketching Time on Analog Clocks (I) Answers

Name: \_\_\_\_\_

Date: \_\_\_\_\_

Sketch each time on the clock face above it.

