



Sketching Time on Analog Clocks (H)


Name: _____


Date: _____


Sketch each time on the clock face above it.


1. 
Noon Midnight
11:30 PM


2. 
Noon Midnight
5:30 PM


3. 
Noon Midnight
9:00 PM


4. 
Midnight Noon
2:00 AM


5. 
Noon Midnight
2:30 PM


6. 
Midnight Noon
10:30 AM

7. 
Midnight Noon
7:00 AM

8. 
Midnight Noon
12:00 AM

9. 
Noon Midnight
12:30 PM

10. 
Midnight Noon
4:00 AM

11. 
Midnight Noon
9:30 AM

12. 
Noon Midnight
6:00 PM

Sketching Time on Analog Clocks (H) Answers

Name: _____

Date: _____

Sketch each time on the clock face above it.

