



# Sketching Time on Analog Clocks (A)


Name: \_\_\_\_\_


Date: \_\_\_\_\_


Sketch each time on the clock face above it.


1.   
Midnight Noon  
9:30 AM


2.   
Midnight Noon  
6:00 AM


3.   
Noon Midnight  
7:30 PM


4.   
Midnight Noon  
11:00 AM

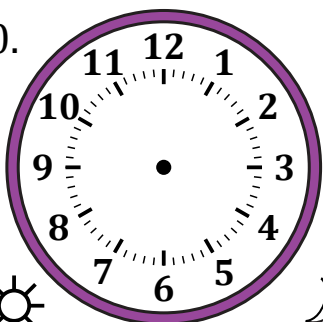
5.   
Midnight Noon  
12:00 AM


6.   
Noon Midnight  
11:30 PM


7.   
Noon Midnight  
4:00 PM

8.   
Noon Midnight  
1:30 PM

9.   
Midnight Noon  
3:00 AM

10.   
Noon Midnight  
9:30 PM

11.   
Midnight Noon  
5:30 AM

12.   
Noon Midnight  
2:00 PM

# Sketching Time on Analog Clocks (A) Answers

Name: \_\_\_\_\_

Date: \_\_\_\_\_

Sketch each time on the clock face above it.

