







Sketching Time on Analog Clocks (I)




Name: _____




Date: _____




Sketch each time on the clock face above it.




1. 
Noon  9:35 PM  Midnight




2. 
Midnight  8:40 AM  Noon




3. 
Noon  6:10 PM  Midnight




4. 
Midnight  11:00 AM  Noon


5. 
Noon  11:20 PM  Midnight




6. 
Noon  2:45 PM  Midnight




7. 
Midnight  1:55 AM  Noon

8. 
Noon  12:15 PM  Midnight

9. 
Midnight  4:25 AM  Noon

10. 
Noon  5:05 PM  Midnight

11. 
Midnight  7:50 AM  Noon

12. 
Midnight  2:30 AM  Noon

Sketching Time on Analog Clocks (I) Answers

Name: _____

Date: _____

Sketch each time on the clock face above it.

