



# Sketching Time on Analog Clocks (E)


Name: \_\_\_\_\_

Date: \_\_\_\_\_


Sketch each time on the clock face above it.


1.   
Noon Midnight  
7:35 PM


2.   
Midnight Noon  
5:30 AM


3.   
Noon Midnight  
4:55 PM


4.   
Noon Midnight  
9:00 PM


5.   
Midnight Noon  
12:20 AM


6.   
Midnight Noon  
2:45 AM


7.   
Midnight Noon  
7:50 AM

8.   
Midnight Noon  
9:10 AM

9.   
Noon Midnight  
12:25 PM

10.   
Noon Midnight  
3:40 PM

11.   
Noon Midnight  
10:15 PM

12.   
Midnight Noon  
10:05 AM

# Sketching Time on Analog Clocks (E) Answers

Name: \_\_\_\_\_

Date: \_\_\_\_\_

Sketch each time on the clock face above it.

