



Sketching Time on Analog Clocks (B)


Name: _____


Date: _____


Sketch each time on the clock face above it.


1. 
Midnight Noon
8:10 AM


2. 
Noon Midnight
6:45 PM


3. 
Midnight Noon
6:20 AM


4. 
Midnight Noon
12:40 AM


5. 
Midnight Noon
3:50 AM

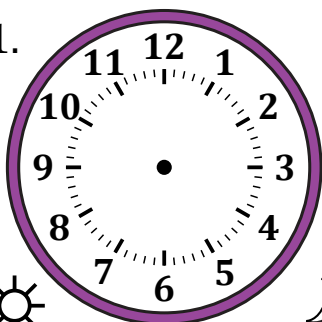
6. 
Noon Midnight
12:05 PM


7. 
Midnight Noon
10:00 AM

8. 
Noon Midnight
10:35 PM

9. 
Noon Midnight
8:15 PM

10. 
Midnight Noon
4:25 AM

11. 
Noon Midnight
4:30 PM

12. 
Noon Midnight
3:55 PM

Sketching Time on Analog Clocks (B) Answers

Name: _____

Date: _____

Sketch each time on the clock face above it.

