



Sketching Time on Analog Clocks (A)


Name: _____


Date: _____


Sketch each time on the clock face above it.


1. 
Noon 1:30 PM Midnight


2. 
Midnight 10:35 AM Noon


3. 
Midnight 2:25 AM Noon


4. 
Noon 3:00 PM Midnight

5. 
Midnight 5:50 AM Noon


6. 
Noon 8:20 PM Midnight


7. 
Noon 5:40 PM Midnight

8. 
Noon 11:05 PM Midnight

9. 
Midnight 8:15 AM Noon

10. 
Noon 7:55 PM Midnight

11. 
Midnight 6:10 AM Noon

12. 
Midnight 1:45 AM Noon

Sketching Time on Analog Clocks (A) Answers

Name: _____

Date: _____

Sketch each time on the clock face above it.

