







Sketching Time on Analog Clocks (I)




Name: _____




Date: _____




Sketch each time on the clock face above it.




1. 
Midnight  Noon 
11:25 AM




2. 
Noon  Midnight 
5:27 PM




3. 
Noon  Midnight 
3:24 PM




4. 
Noon  Midnight 
1:13 PM




5. 
Noon  Midnight 
10:48 PM

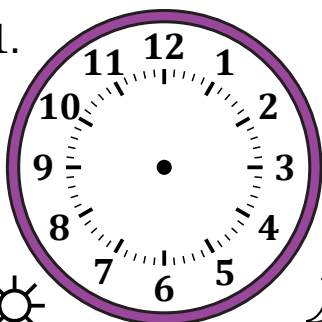


6. 
Noon  Midnight 
7:49 PM




7. 
Midnight  Noon 
3:10 AM

8. 
Midnight  Noon 
7:40 AM

9. 
Midnight  Noon 
9:58 AM

10. 
Midnight  Noon 
12:32 AM

11. 
Noon  Midnight 
8:05 PM

12. 
Midnight  Noon 
5:44 AM

Sketching Time on Analog Clocks (I) Answers

Name: _____

Date: _____

Sketch each time on the clock face above it.

