



Sketching Time on Analog Clocks (I)

Name: _____


Date: _____


Sketch each time on the clock face above it.


1. 
Noon 15:27:00 Midnight

2. 
Midnight 09:47:00 Noon

3. 
Midnight 00:29:30 Noon

4. 
Noon 13:08:00 Midnight


5. 
Midnight 05:07:00 Noon


6. 
Noon 20:00:00 Midnight

7. 
Midnight 11:36:30 Noon

8. 
Midnight 07:31:30 Noon

9. 
Noon 18:41:30 Midnight

10. 
Noon 16:06:00 Midnight

11. 
Noon 22:49:30 Midnight

12. 
Midnight 03:21:30 Noon

Sketching Time on Analog Clocks (I) Answers

Name: _____

Date: _____

Sketch each time on the clock face above it.

