


# Sketching Time on Analog Clocks (G)


Name: \_\_\_\_\_

Date: \_\_\_\_\_

Sketch each time on the clock face above it.


1.   
Noon 17:53:00 Midnight


2.   
Midnight 07:23:30 Noon


3.   
Noon 12:05:00 Midnight


4.   
Noon 20:33:30 Midnight


5.   
Midnight 03:15:00 Noon

6.   
Noon 14:37:00 Midnight


7.   
Noon 22:24:30 Midnight

8.   
Noon 18:20:30 Midnight

9.   
Midnight 09:44:00 Noon

10.   
Midnight 04:31:00 Noon

11.   
Midnight 10:23:30 Noon

12.   
Midnight 01:56:30 Noon

# Sketching Time on Analog Clocks (G) Answers

Name: \_\_\_\_\_

Date: \_\_\_\_\_

Sketch each time on the clock face above it.

