



# Sketching Time on Analog Clocks (E)


Name: \_\_\_\_\_


Date: \_\_\_\_\_

Sketch each time on the clock face above it.


1.   
Midnight Noon  
04:27:30


2.   
Midnight Noon  
02:25:30


3.   
Noon Midnight  
23:19:30


4.   
Midnight Noon  
07:53:30


5.   
Midnight Noon  
01:32:00

6.   
Noon Midnight  
13:16:30

7.   
Midnight Noon  
10:53:00

8.   
Noon Midnight  
17:38:00

9.   
Noon Midnight  
19:17:00

10.   
Noon Midnight  
15:59:00

11.   
Midnight Noon  
08:30:00

12.   
Noon Midnight  
20:33:30

# Sketching Time on Analog Clocks (E) Answers

Name: \_\_\_\_\_

Date: \_\_\_\_\_

Sketch each time on the clock face above it.

