



Sketching Time on Analog Clocks (D)

Name: _____


Date: _____


Sketch each time on the clock face above it.

1. 
Noon 23:54:00 Midnight

2. 
Midnight 09:19:30 Noon


3. 
Midnight 01:12:30 Noon


4. 
Noon 12:15:30 Midnight


5. 
Midnight 05:28:30 Noon

6. 
Midnight 03:27:00 Noon


7. 
Noon 18:33:00 Midnight

8. 
Midnight 06:12:30 Noon

9. 
Noon 16:02:00 Midnight

10. 
Noon 15:45:00 Midnight

11. 
Noon 20:38:00 Midnight

12. 
Midnight 10:52:30 Noon

Sketching Time on Analog Clocks (D) Answers

Name: _____

Date: _____

Sketch each time on the clock face above it.

