


Sketching Time on Analog Clocks (B)


Name: _____


Date: _____


Sketch each time on the clock face above it.


1. 
Noon 20:18:00 Midnight


2. 
Midnight 11:31:30 Noon

3. 
Noon 14:00:00 Midnight

4. 
Noon 18:51:00 Midnight


5. 
Midnight 05:58:30 Noon

6. 
Midnight 02:16:30 Noon


7. 
Midnight 08:09:00 Noon

8. 
Noon 22:06:00 Midnight

9. 
Noon 13:53:30 Midnight

10. 
Midnight 01:14:30 Noon

11. 
Midnight 07:05:30 Noon


12. 
Noon 16:29:00 Midnight


Sketching Time on Analog Clocks (B) Answers


Name: _____


Date: _____

Sketch each time on the clock face above it.

1. 
Noon Midnight
20:18:00


2. 
Midnight Noon
11:31:30


3. 
Noon Midnight
14:00:00

4. 
Noon Midnight
18:51:00

5. 
Midnight Noon
05:58:30

6. 
Midnight Noon
02:16:30

7. 
Midnight Noon
08:09:00

8. 
Noon Midnight
22:06:00

9. 
Noon Midnight
13:53:30

10. 
Midnight Noon
01:14:30

11. 
Midnight Noon
07:05:30

12. 
Noon Midnight
16:29:00