


Sketching Time on Analog Clocks (A)

Name: _____


Date: _____


Sketch each time on the clock face above it.


1. 
Midnight 02:53:00 Noon

2. 
Noon 22:03:30 Midnight


3. 
Midnight 07:27:00 Noon


4. 
Midnight 10:04:00 Noon


5. 
Midnight 01:31:30 Noon

6. 
Noon 16:10:30 Midnight


7. 
Noon 20:39:00 Midnight

8. 
Noon 12:43:00 Midnight

9. 
Midnight 08:57:30 Noon

10. 
Midnight 04:23:30 Noon

11. 
Noon 19:00:30 Midnight

12. 
Noon 15:35:00 Midnight