



# Sketching Time on Analog Clocks (F)


Name: \_\_\_\_\_


Date: \_\_\_\_\_

Sketch each time on the clock face above it.

1.   
Noon 14:04:15 Midnight

2.   
Midnight 10:34:00 Noon

3.   
Noon 20:22:15 Midnight

4.   
Midnight 04:37:00 Noon


5.   
Noon 12:07:30 Midnight


6.   
Midnight 00:04:45 Noon

7.   
Noon 18:01:30 Midnight

8.   
Midnight 06:59:45 Noon

9.   
Noon 23:09:15 Midnight

10.   
Midnight 08:59:30 Noon

11.   
Noon 17:47:45 Midnight

12.   
Midnight 03:16:00 Noon