



Sketching Time on Analog Clocks (E)


Name: _____


Date: _____


Sketch each time on the clock face above it.


1. 
Noon
13:00
Midnight

2. 
Noon
18:30
Midnight


3. 
Noon
17:15
Midnight


4. 
Noon
14:45
Midnight


5. 
Noon
20:45
Midnight


6. 
Noon
23:30
Midnight


7. 
Midnight
08:45
Noon

8. 
Midnight
07:15
Noon

9. 
Midnight
04:00
Noon

10. 
Midnight
02:15
Noon

11. 
Midnight
01:30
Noon

12. 
Midnight
10:00
Noon

Sketching Time on Analog Clocks (E) Answers

Name: _____

Date: _____

Sketch each time on the clock face above it.

