













Reading Time on Analog Clocks (A)

Name: _____

Date: _____

Read each time and write it in the space under the clock.



Reading Time on Analog Clocks (A) Answers

Name: _____

Date: _____

Read each time and write it in the space under the clock.


1. 
Noon 12:53:20 PM Midnight

2. 
Noon 7:33:15 PM Midnight

3. 
Midnight 3:17:05 AM Noon

4. 
Midnight 6:10:00 AM Noon

5. 
Noon 8:09:35 PM Midnight

6. 
Midnight 9:11:50 AM Noon

7. 
Midnight 10:22:25 AM Noon

8. 
Noon 5:13:30 PM Midnight

9. 
Noon 3:14:55 PM Midnight

10. 
Noon 11:58:40 PM Midnight

11. 
Midnight 5:30:45 AM Noon

12. 
Midnight 12:27:10 AM Noon