

# Reading Time on Analog Clocks (A)

Name: \_\_\_\_\_

Date: \_\_\_\_\_

Read each time and write it in the space under the clock.

1.




  
Midnight

  
Noon

\_\_\_\_\_

2.




  
Midnight

  
Noon

\_\_\_\_\_

3.




  
Noon

  
Midnight

\_\_\_\_\_

4.



  
Noon

  
Midnight

\_\_\_\_\_


# Reading Time on Analog Clocks (A) Answers

Name: \_\_\_\_\_

Date: \_\_\_\_\_

Read each time and write it in the space under the clock.

1.




Midnight

Noon

07:34:08

2.



Midnight

Noon

05:55:51

3.




Noon

Midnight

17:32:23

4.



Noon

Midnight

19:56:30