


# Reading Time on Analog Clocks (F)

Name: \_\_\_\_\_

Date: \_\_\_\_\_

Read each time and write it in the space under the clock.

1.




Midnight

Noon

\_\_\_\_\_

2.




Noon

Midnight

\_\_\_\_\_

3.




Noon

Midnight

\_\_\_\_\_

4.




Midnight

Noon

\_\_\_\_\_

5.




Noon

Midnight

\_\_\_\_\_

6.




Midnight

Noon

\_\_\_\_\_

7.




Midnight

Noon

\_\_\_\_\_

8.




Noon

Midnight

\_\_\_\_\_

9.




Midnight

Noon

\_\_\_\_\_

10.




Noon

Midnight

\_\_\_\_\_

11.




Noon

Midnight

\_\_\_\_\_

12.



Midnight

Noon

\_\_\_\_\_


# Reading Time on Analog Clocks (F) Answers

Name: \_\_\_\_\_


Date: \_\_\_\_\_

Read each time and write it in the space under the clock.

1.



2.



3.



4.




5.




6.



7.




8.



9.



10.



11.



12.

