

Reading Time on Analog Clocks (I)

Name: _____

Date: _____

Read each time and write it in the space under the clock.


1.



Midnight

Noon


2.



Midnight

Noon

3.



Noon

Midnight


4.



Midnight

Noon


5.



Midnight

Noon


6.



Noon

Midnight


7.



Noon

Midnight


8.



Midnight

Noon


9.



Noon

Midnight


10.



Noon

Midnight


11.



Midnight

Noon

12.



Noon

Midnight

Reading Time on Analog Clocks (I) Answers

Name: _____

Date: _____

Read each time and write it in the space under the clock.

