







Reading Pictographs (J)

Answer the questions about the pictograph.

Number of Trains that Pass Through 5 Towns Each Day

Littleton	
Bigton	
Smallton	
Largeton	
Carleton	

 = 1 Train

1. Which town has the most trains pass through it each day? How many?
2. Which town has the fewest trains pass through it each day? How many.
3. Which town has 10 trains pass through it each day?
4. How many more trains pass through Carleton than through Littleton each day?
5. Johnston has 11 trains pass through it each day. How does that compare with the towns in the pictograph?