







Reading Pictographs (G)

Answer the questions about the pictograph.

Number of Books Read by 5 Students in 1 Year

Sophia	
Jacob	
Isabella	
Mason	
Emma	

 = 10 books

1. Who read the most books? How many?
2. Who read the fewest books? How many?
3. How many books were read by all five students?
4. How many fewer books did Isabella read than Jacob?
5. William read 50 books in 1 year. If he was added to the pictograph, how would your answers to the questions above change?