






# Reading Pictographs (C)

Answer the questions about the pictograph.

## Lightning Strikes in 5 Towns During a Recent Storm

Littleton	
Bigton	
Smallton	
Largeton	
Carleton	

 = 3 lightning strikes

1. Which town had the most lightning strikes? How many?
2. Which town had the fewest lightning strikes? How many?
3. How many lightning strikes were there all together in all five towns?
4. How many more lightning strikes were there in Bigton than in Carleton?
5. Another town, Johnston, had 15 lightning strikes. Which towns in the pictograph had the same number of lightning strikes?