

# Autumn Trees Picture Ratios (E)

Name: \_\_\_\_\_

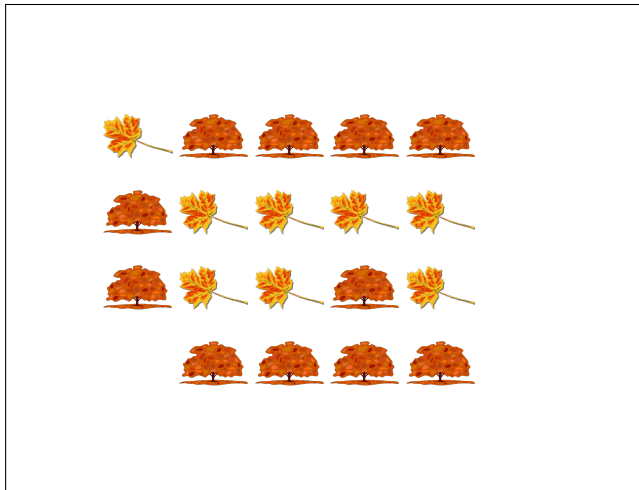
Date: \_\_\_\_\_

Determine each ratio and simplify if necessary.




 :  =

 :  =




 :  =

 :  =



 :  =

 :  =



 :  =


 :  =

# Autumn Trees Picture Ratios (E) Answers

Name: \_\_\_\_\_


Date: \_\_\_\_\_

Determine each ratio and simplify if necessary.




$$\text{Yellow tree} : \text{Brown tree} = 15 : 25 = 3 : 5$$

$$\text{Brown tree} : \text{Yellow tree} = 25 : 15 = 5 : 3$$



$$\text{Yellow tree} : \text{Orange tree} = 8 : 11$$

$$\text{Orange tree} : \text{Yellow tree} = 11 : 8$$



$$\text{Acorn} : \text{Leaf} = 14 : 12 = 7 : 6$$

$$\text{Leaf} : \text{Acorn} = 12 : 14 = 6 : 7$$



$$\text{Orange stem leaf} : \text{Yellow stem leaf} = 5 : 7$$

$$\text{Yellow stem leaf} : \text{Orange stem leaf} = 7 : 5$$