

Autumn Trees Picture Ratios (E)

Name: _____

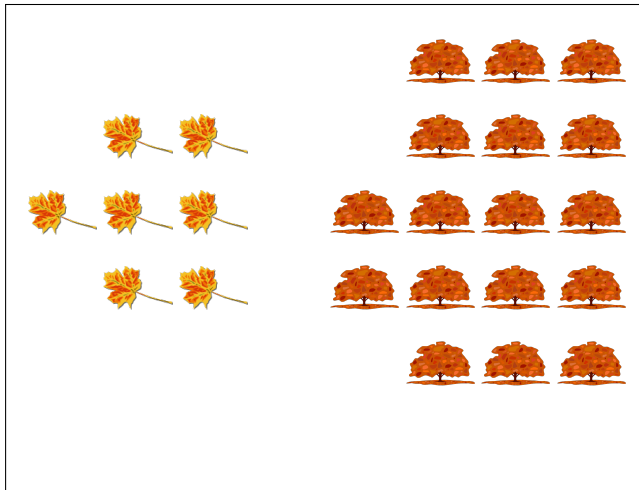
Date: _____

Determine each ratio and simplify if necessary.




$$\text{leaf} : \text{oak leaf} =$$

$$\text{oak leaf} : \text{leaf} =$$




$$\text{maple leaf} : \text{tree} =$$

$$\text{tree} : \text{maple leaf} =$$



$$\text{maple leaf} : \text{acorn} =$$

$$\text{acorn} : \text{maple leaf} =$$



$$\text{tree} : \text{leaf} =$$

$$\text{leaf} : \text{tree} =$$

Autumn Trees Picture Ratios (E) Answers

Name: _____

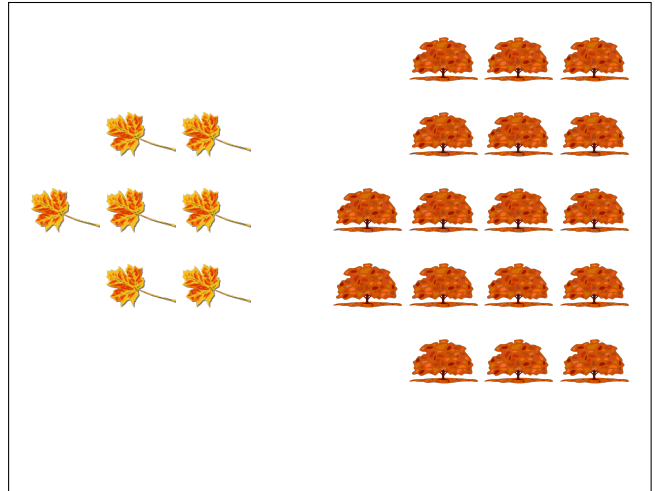
Date: _____

Determine each ratio and simplify if necessary.




$$\text{leaf} : \text{oak leaf} = 16 : 7$$

$$\text{oak leaf} : \text{leaf} = 7 : 16$$




$$\text{maple leaf} : \text{tree} = 7 : 17$$

$$\text{tree} : \text{maple leaf} = 17 : 7$$



$$\text{maple leaf} : \text{acorn} = 11 : 12$$

$$\text{acorn} : \text{maple leaf} = 12 : 11$$



$$\text{tree} : \text{maple leaf} = 18 : 22 = 9 : 11$$

$$\text{maple leaf} : \text{tree} = 22 : 18 = 11 : 9$$