









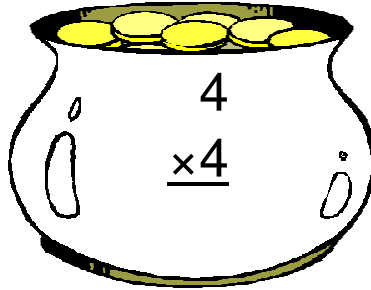



Pot of Gold Multiplication (F)

Instructions: Can you find Lucky's real pot of gold? Maybe he has more than one hidden. Circle all of the pots with a product of 14.



Pot of Gold Multiplication (F) Answers

Instructions: Can you find Lucky's real pot of gold? Maybe he has more than one hidden. Circle all of the pots with a product of 14.

$$\begin{array}{r} 2 \\ \times 1 \\ \hline 2 \end{array}$$

$$\begin{array}{r} 4 \\ \times 4 \\ \hline 16 \end{array}$$

$$\begin{array}{r} 6 \\ \times 2 \\ \hline 12 \end{array}$$

$$\begin{array}{r} 3 \\ \times 2 \\ \hline 6 \end{array}$$

$$\begin{array}{r} 6 \\ \times 5 \\ \hline 30 \end{array}$$

$$\begin{array}{r} 6 \\ \times 4 \\ \hline 24 \end{array}$$

$$\begin{array}{r} 2 \\ \times 3 \\ \hline 6 \end{array}$$

$$\begin{array}{r} 1 \\ \times 1 \\ \hline 1 \end{array}$$

$$\begin{array}{r} 7 \\ \times 1 \\ \hline 7 \end{array}$$

$$\begin{array}{r} 6 \\ \times 3 \\ \hline 18 \end{array}$$

$$\begin{array}{r} 2 \\ \times 7 \\ \hline 14 \end{array}$$

$$\begin{array}{r} 4 \\ \times 1 \\ \hline 4 \end{array}$$

Lucky's Pot