


St. Patrick's Day Counting (A)

Count how many Leprechaun hats there are in each group.

1. There are ____ leprechaun hats in the group below.



2. There are ____ leprechaun hats in the group below.



3. There are ____ leprechaun hats in the group below.



4. There are ____ leprechaun hats in the group below.



5. There are ____ leprechaun hats in the group below.




6. There are ____ leprechaun hats in the group below.



St. Patrick's Day Counting (A) Answers

Count how many Leprechaun hats there are in each group.

1. There are 12 leprechaun hats in the group below.



2. There are 2 leprechaun hats in the group below.



3. There are 19 leprechaun hats in the group below.



4. There are 9 leprechaun hats in the group below.



5. There are 7 leprechaun hats in the group below.




6. There are 11 leprechaun hats in the group below.



St. Patrick's Day Counting (B)

Count how many Leprechaun hats there are in each group.

1. There are ____ leprechaun hats in the group below.



2. There are ____ leprechaun hats in the group below.



3. There are ____ leprechaun hats in the group below.



4. There are ____ leprechaun hats in the group below.



5. There are ____ leprechaun hats in the group below.




6. There are ____ leprechaun hats in the group below.



St. Patrick's Day Counting (B) Answers

Count how many Leprechaun hats there are in each group.

1. There are 18 leprechaun hats in the group below.



2. There are 13 leprechaun hats in the group below.



3. There are 6 leprechaun hats in the group below.



4. There are 15 leprechaun hats in the group below.



5. There are 5 leprechaun hats in the group below.



6. There are 6 leprechaun hats in the group below.




St. Patrick's Day Counting (C)

Count how many Leprechaun hats there are in each group.

1. There are ____ leprechaun hats in the group below.



2. There are ____ leprechaun hats in the group below.




3. There are ____ leprechaun hats in the group below.



4. There are ____ leprechaun hats in the group below.



5. There are ____ leprechaun hats in the group below.



6. There are ____ leprechaun hats in the group below.




St. Patrick's Day Counting (C) Answers

Count how many Leprechaun hats there are in each group.

1. There are 11 leprechaun hats in the group below.



2. There are 42 leprechaun hats in the group below.




3. There are 4 leprechaun hats in the group below.



4. There are 7 leprechaun hats in the group below.



5. There are 16 leprechaun hats in the group below.




6. There are 2 leprechaun hats in the group below.



St. Patrick's Day Counting (D)

Count how many Leprechaun hats there are in each group.

1. There are ____ leprechaun hats in the group below.



2. There are ____ leprechaun hats in the group below.



3. There are ____ leprechaun hats in the group below.




4. There are ____ leprechaun hats in the group below.



5. There are ____ leprechaun hats in the group below.




6. There are ____ leprechaun hats in the group below.



St. Patrick's Day Counting (D) Answers

Count how many Leprechaun hats there are in each group.

1. There are 30 leprechaun hats in the group below.



2. There are 7 leprechaun hats in the group below.



3. There are 3 leprechaun hats in the group below.




4. There are 5 leprechaun hats in the group below.



5. There are 17 leprechaun hats in the group below.



6. There are 24 leprechaun hats in the group below.



St. Patrick's Day Counting (E)

Count how many Leprechaun hats there are in each group.

1. There are ____ leprechaun hats in the group below.



2. There are ____ leprechaun hats in the group below.



3. There are ____ leprechaun hats in the group below.




4. There are ____ leprechaun hats in the group below.



5. There are ____ leprechaun hats in the group below.



6. There are ____ leprechaun hats in the group below.



St. Patrick's Day Counting (E) Answers

Count how many Leprechaun hats there are in each group.

1. There are 12 leprechaun hats in the group below.



2. There are 5 leprechaun hats in the group below.



3. There are 10 leprechaun hats in the group below.




4. There are 5 leprechaun hats in the group below.



5. There are 2 leprechaun hats in the group below.



6. There are 21 leprechaun hats in the group below.




St. Patrick's Day Counting (F)

Count how many Leprechaun hats there are in each group.

1. There are ____ leprechaun hats in the group below.



2. There are ____ leprechaun hats in the group below.



3. There are ____ leprechaun hats in the group below.



4. There are ____ leprechaun hats in the group below.



5. There are ____ leprechaun hats in the group below.



6. There are ____ leprechaun hats in the group below.




St. Patrick's Day Counting (F) Answers

Count how many Leprechaun hats there are in each group.

1. There are 5 leprechaun hats in the group below.



2. There are 36 leprechaun hats in the group below.



3. There are 16 leprechaun hats in the group below.



4. There are 9 leprechaun hats in the group below.



5. There are 7 leprechaun hats in the group below.



6. There are 9 leprechaun hats in the group below.



St. Patrick's Day Counting (G)

Count how many Leprechaun hats there are in each group.

1. There are ____ leprechaun hats in the group below.



2. There are ____ leprechaun hats in the group below.



3. There are ____ leprechaun hats in the group below.




4. There are ____ leprechaun hats in the group below.



5. There are ____ leprechaun hats in the group below.




6. There are ____ leprechaun hats in the group below.



St. Patrick's Day Counting (G) Answers

Count how many Leprechaun hats there are in each group.

1. There are 21 leprechaun hats in the group below.



2. There are 13 leprechaun hats in the group below.



3. There are 7 leprechaun hats in the group below.




4. There are 7 leprechaun hats in the group below.



5. There are 5 leprechaun hats in the group below.



6. There are 25 leprechaun hats in the group below.



St. Patrick's Day Counting (H)

Count how many Leprechaun hats there are in each group.

1. There are ____ leprechaun hats in the group below.




2. There are ____ leprechaun hats in the group below.




3. There are ____ leprechaun hats in the group below.



4. There are ____ leprechaun hats in the group below.



5. There are ____ leprechaun hats in the group below.



6. There are ____ leprechaun hats in the group below.



St. Patrick's Day Counting (H) Answers

Count how many Leprechaun hats there are in each group.

1. There are 14 leprechaun hats in the group below.




2. There are 11 leprechaun hats in the group below.




3. There are 3 leprechaun hats in the group below.



4. There are 35 leprechaun hats in the group below.



5. There are 36 leprechaun hats in the group below.



6. There are 5 leprechaun hats in the group below.



St. Patrick's Day Counting (I)

Count how many Leprechaun hats there are in each group.

1. There are ____ leprechaun hats in the group below.



2. There are ____ leprechaun hats in the group below.



3. There are ____ leprechaun hats in the group below.




4. There are ____ leprechaun hats in the group below.



5. There are ____ leprechaun hats in the group below.



6. There are ____ leprechaun hats in the group below.



St. Patrick's Day Counting (I) Answers

Count how many Leprechaun hats there are in each group.

1. There are 14 leprechaun hats in the group below.



2. There are 4 leprechaun hats in the group below.



3. There are 4 leprechaun hats in the group below.




4. There are 4 leprechaun hats in the group below.



5. There are 5 leprechaun hats in the group below.



6. There are 24 leprechaun hats in the group below.



St. Patrick's Day Counting (J)

Count how many Leprechaun hats there are in each group.

1. There are ____ leprechaun hats in the group below.




2. There are ____ leprechaun hats in the group below.



3. There are ____ leprechaun hats in the group below.



4. There are ____ leprechaun hats in the group below.



5. There are ____ leprechaun hats in the group below.



6. There are ____ leprechaun hats in the group below.



St. Patrick's Day Counting (J) Answers

Count how many Leprechaun hats there are in each group.

1. There are 6 leprechaun hats in the group below.




2. There are 8 leprechaun hats in the group below.



3. There are 5 leprechaun hats in the group below.



4. There are 42 leprechaun hats in the group below.



5. There are 15 leprechaun hats in the group below.



6. There are 3 leprechaun hats in the group below.

