


St. Patrick's Day Counting (D)

Count how many Leprechaun hats there are in each group.

1. There are ____ leprechaun hats in the group below.



2. There are ____ leprechaun hats in the group below.



3. There are ____ leprechaun hats in the group below.




4. There are ____ leprechaun hats in the group below.



5. There are ____ leprechaun hats in the group below.




6. There are ____ leprechaun hats in the group below.



St. Patrick's Day Counting (D) Answers

Count how many Leprechaun hats there are in each group.

1. There are 30 leprechaun hats in the group below.



2. There are 7 leprechaun hats in the group below.



3. There are 3 leprechaun hats in the group below.



4. There are 5 leprechaun hats in the group below.



5. There are 17 leprechaun hats in the group below.



6. There are 24 leprechaun hats in the group below.

