



















Percentage Increase/Decrease (F)

Name: _____

Date: _____

Calculate the percentage increase or decrease.

	Original Amount		New Amount	Increase or Decrease	Percentage Change
1.	326	→	163	 	
2.	420	→	735	 	
3.	952	→	1190	 	
4.	960	→	1440	 	
5.	116	→	29	 	
6.	900	→	225	 	
7.	576	→	720	 	
8.	468	→	234	 	
9.	430	→	215	 	
10.	292	→	365	