



















Percentage Increase/Decrease (F)

Name: _____

Date: _____

Calculate the percentage increase or decrease.

	Original Amount		New Amount	Increase or Decrease	Percentage Change
1.	930	→	465	 	
2.	700	→	735	 	
3.	900	→	540	 	
4.	840	→	42	 	
5.	120	→	42	 	
6.	680	→	1258	 	
7.	360	→	234	 	
8.	950	→	1615	 	
9.	380	→	551	 	
10.	370	→	481	