





Percentage Increase/Decrease (I)



Name: _____



Date: _____



Calculate the percentage increase or decrease.



	Original Amount		New Amount	Increase or Decrease	Percentage Change
1.	\$7.00	→	\$7.63	 	



2.	\$8.00	→	\$9.20	 	



3.	\$4.00	→	\$3.56	 	



4.	\$5.00	→	\$4.40	 	

5.	\$9.50	→	\$8.17	 	

6.	\$7.00	→	\$8.19	 	

7.	\$4.00	→	\$3.28	 	

8.	\$5.50	→	\$5.83	 	

9.	\$3.00	→	\$3.57	 	

10.	\$4.00	→	\$3.96	