





Percentage Increase/Decrease (E)



Name: _____



Date: _____



Calculate the percentage increase or decrease.



	Original Amount		New Amount	Increase or Decrease	Percentage Change
1.	\$8.06	→	\$4.03	 	



2.	\$9.44	→	\$2.36	 	



3.	\$7.40	→	\$9.25	 	



4.	\$3.52	→	\$6.16	 	

5.	\$5.80	→	\$10.15	 	

6.	\$5.60	→	\$8.40	 	

7.	\$2.12	→	\$0.53	 	

8.	\$3.88	→	\$2.91	 	

9.	\$9.50	→	\$4.75	 	

10.	\$3.08	→	\$5.39	