





Percentage Increase/Decrease (C)



Name: _____



Date: _____



Calculate the percentage increase or decrease.



	Original Amount		New Amount	Increase or Decrease	Percentage Change
1.	\$6.56	→	\$3.28	 	



2.	\$9.84	→	\$2.46	 	



3.	\$9.36	→	\$11.70	 	



4.	\$3.92	→	\$2.94	 	

5.	\$5.04	→	\$3.78	 	

6.	\$3.98	→	\$1.99	 	

7.	\$1.08	→	\$1.62	 	

8.	\$7.68	→	\$13.44	 	

9.	\$4.04	→	\$5.05	 	

10.	\$5.24	→	\$9.17	