



















Percentage Increase/Decrease (B)

Name: _____

Date: _____

Calculate the percentage increase or decrease.

	Original Amount		New Amount	Increase or Decrease	Percentage Change
1.	\$1.40	→	\$2.45	 	
2.	\$1.32	→	\$1.65	 	
3.	\$3.68	→	\$1.84	 	
4.	\$8.24	→	\$2.06	 	
5.	\$4.08	→	\$1.02	 	
6.	\$5.08	→	\$3.81	 	
7.	\$2.68	→	\$4.02	 	
8.	\$4.54	→	\$2.27	 	
9.	\$4.12	→	\$5.15	 	
10.	\$2.72	→	\$3.40	