



















Percentage Increase/Decrease (F)

Name: _____

Date: _____

Calculate the percentage increase or decrease.

	Original Amount		New Amount	Increase or Decrease	Percentage Change
1.	\$800	→	\$776	 	
2.	\$760	→	\$798	 	
3.	\$400	→	\$328	 	
4.	\$350	→	\$308	 	
5.	\$900	→	\$837	 	
6.	\$400	→	\$376	 	
7.	\$500	→	\$510	 	
8.	\$700	→	\$756	 	
9.	\$825	→	\$858	 	
10.	\$200	→	\$234	