



















Percentage Increase/Decrease (E)

Name: _____

Date: _____

Calculate the percentage increase or decrease.

	Original Amount		New Amount	Increase or Decrease	Percentage Change
1.	\$250	→	\$290	 	
2.	\$325	→	\$351	 	
3.	\$450	→	\$396	 	
4.	\$200	→	\$178	 	
5.	\$700	→	\$637	 	
6.	\$800	→	\$688	 	
7.	\$600	→	\$486	 	
8.	\$900	→	\$954	 	
9.	\$500	→	\$565	 	
10.	\$140	→	\$154	